



Name:

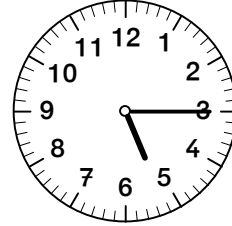
Datum: _____

Heute ist _____

1. Wie viel Uhr ist es? Trage die Vormittags- und Nachmittagszeit ein.






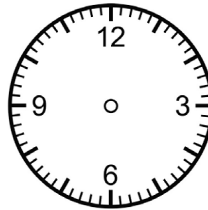




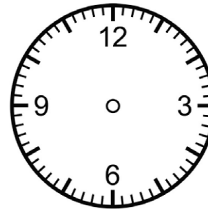
2. Zeichne die folgenden Zeiten ein.



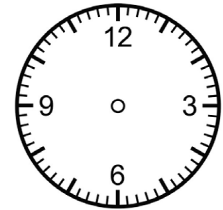
14:32



9:07




16:13

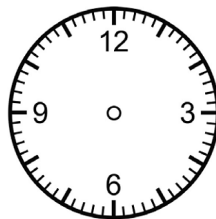


21:45


3. Welche Zeitspannen wurden markiert?



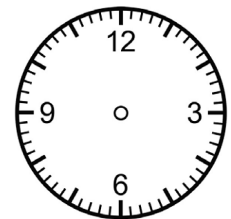
__ min



__ min




__ min




__ min


4. Markiere folgende Zeitspannen.




15 min



37 min



23 min



55 min