

Name:

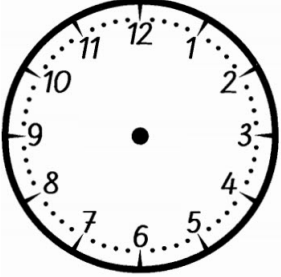
Datum: _____


Heute ist _____

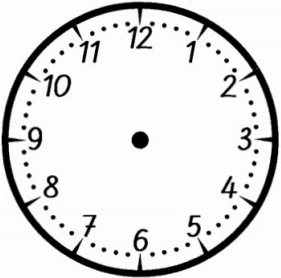
Halbe und ganze Stunden:


Zeichne die passende Uhrzeit ein! Achte auf die Größe der Zeiger!

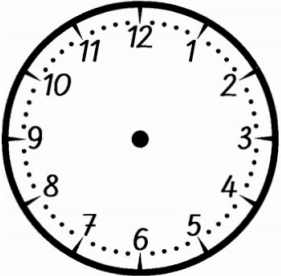
Schreibe anschließend die zweite mögliche Uhrzeit dazu!


	<hr/> 16:00 <hr/>
-----------------------------------------------------------------------------------	--------------------------

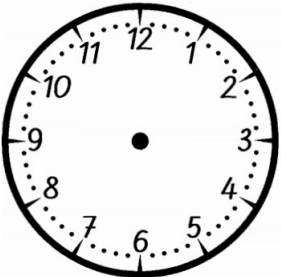
	8:30 <hr/> <hr/>
------------------------------------------------------------------------------------	----------------------------


	10:30 <hr/> <hr/>
------------------------------------------------------------------------------------	-----------------------------

	<hr/> 15:00 <hr/>
-------------------------------------------------------------------------------------	--------------------------

	11:00 <hr/> <hr/>
-------------------------------------------------------------------------------------	-----------------------------

	5:30 <hr/> <hr/>
--------------------------------------------------------------------------------------	----------------------------

	9:30 <hr/> <hr/>
-------------------------------------------------------------------------------------	----------------------------

	7:00 <hr/> <hr/>
--------------------------------------------------------------------------------------	----------------------------